

Name : _____

Score : _____

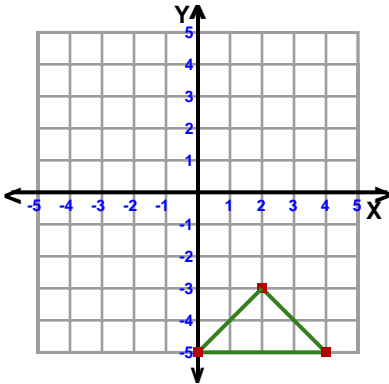
Teacher : _____

Date : _____

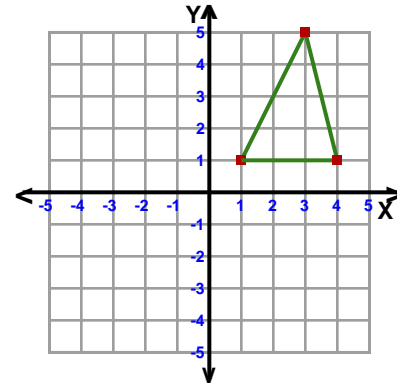
Transformations

ccw = counterclockwise

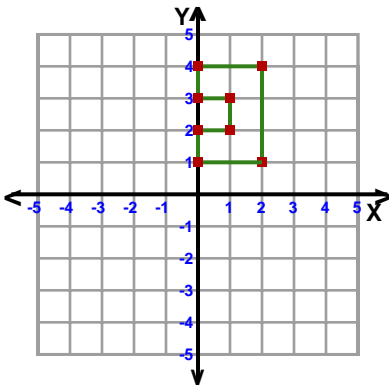
- 1) Rotation: 90° ccw about the origin



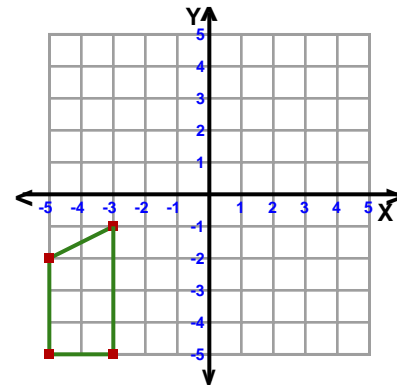
- 2) Reflection: Across Line $y = x$



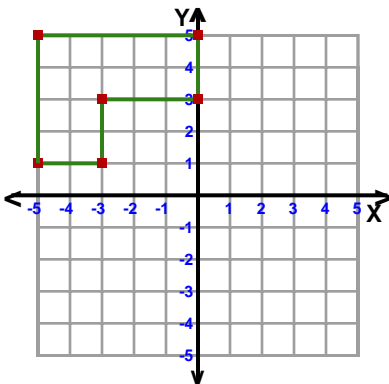
- 3) Translation: 4 left and 4 down



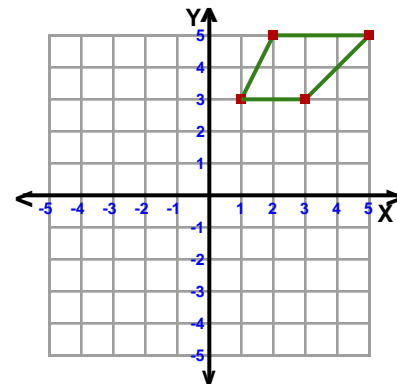
- 4) Reflection: Across the y-axis



- 5) Translation: 2 right and 5 down



- 6) Rotation: 180° about the origin



Name : _____

Score : _____

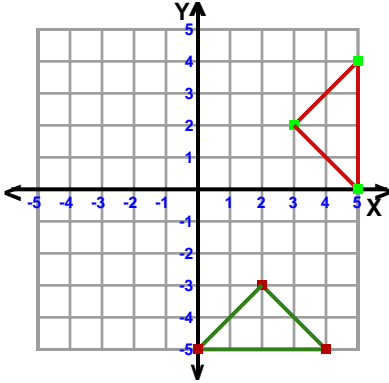
Teacher : _____

Date : _____

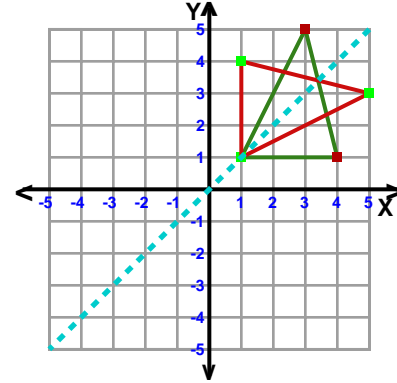
Transformations

ccw = counterclockwise

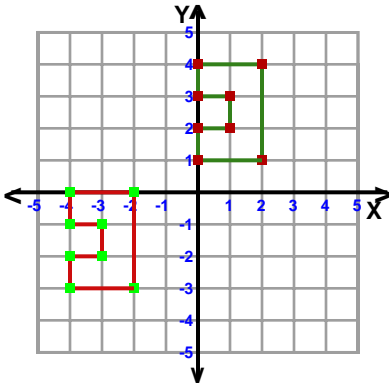
1) Rotation: 90° ccw about the origin



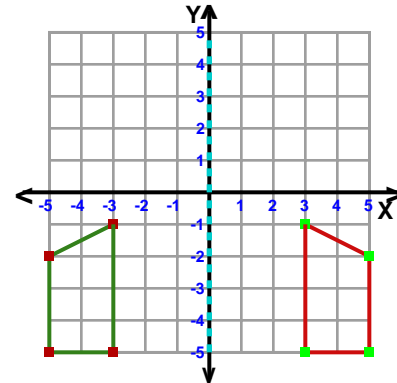
2) Reflection: Across Line $y = x$



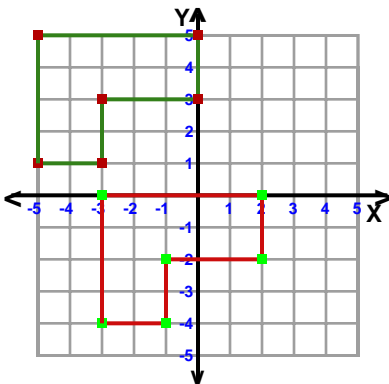
3) Translation: 4 left and 4 down



4) Reflection: Across the y-axis



5) Translation: 2 right and 5 down



6) Rotation: 180° about the origin

